

Using Maps

Label the pictures using words from the word bank:

map title

Northern Hemisphere

scale line

route map

Western Hemisphere

compass rose

map grid

inset map

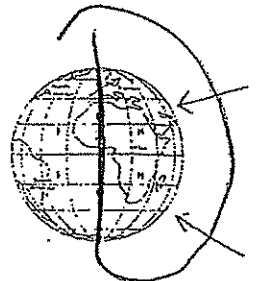
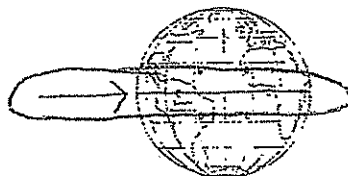
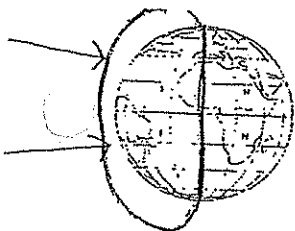
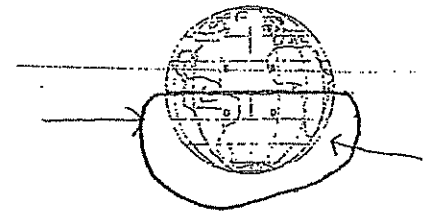
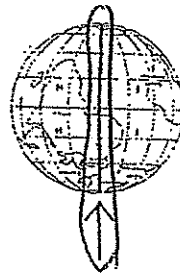
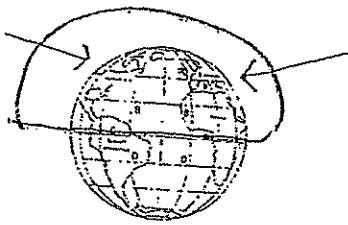
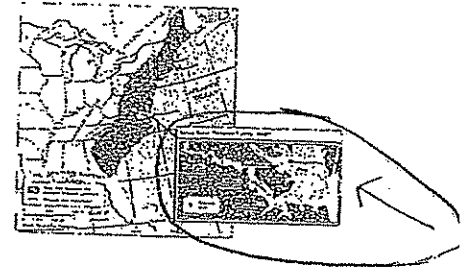

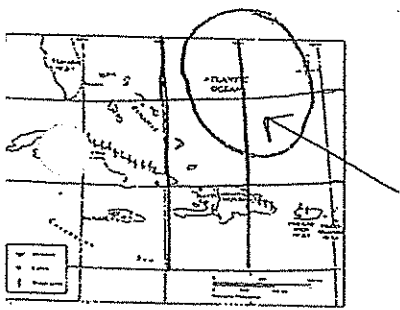
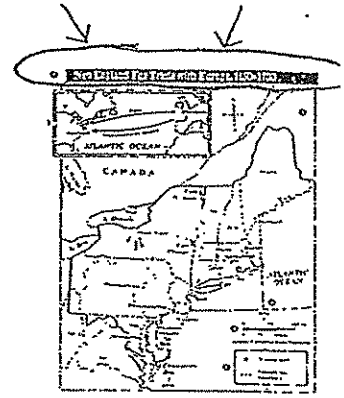
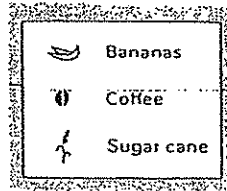
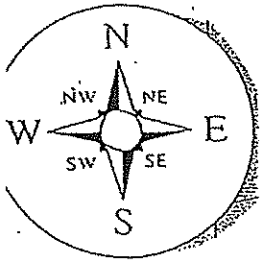
Southern Hemisphere

legend/key

Eastern Hemisphere

Equator

Prime Meridian



Circle the correct answer to each question.

1. Use a _____ to know the directions on a map.
a. compass rose b. inset map c. scale line
2. Read the _____ to understand what the map is about.
a. map grid b. route map c. map title
3. Use the _____ to measure the distance between two places.
a. scale line b. Equator c. compass rose
4. Use the _____ to get more information about a specific place on a larger map.
a. legend/key b. map grid c. inset map
5. Use the _____ to locate a specific spot on a map.
a. map title b. route map c. map grid
6. Use the _____ to understand what the colors, symbols, etc. on a map stand for.
a. legend/key b. inset map c. compass rose
7. Use a _____ to see the movement of people or goods across an area.
a. scale line b. map grid c. route map
8. Places above the Equator are located in the _____ Hemisphere.
a. Eastern b. Southern c. Northern
9. The Prime Meridian is a _____ line.
a. longitude b. latitude c. long
10. The Equator is a _____ line.
a. longitude b. latitude c. long