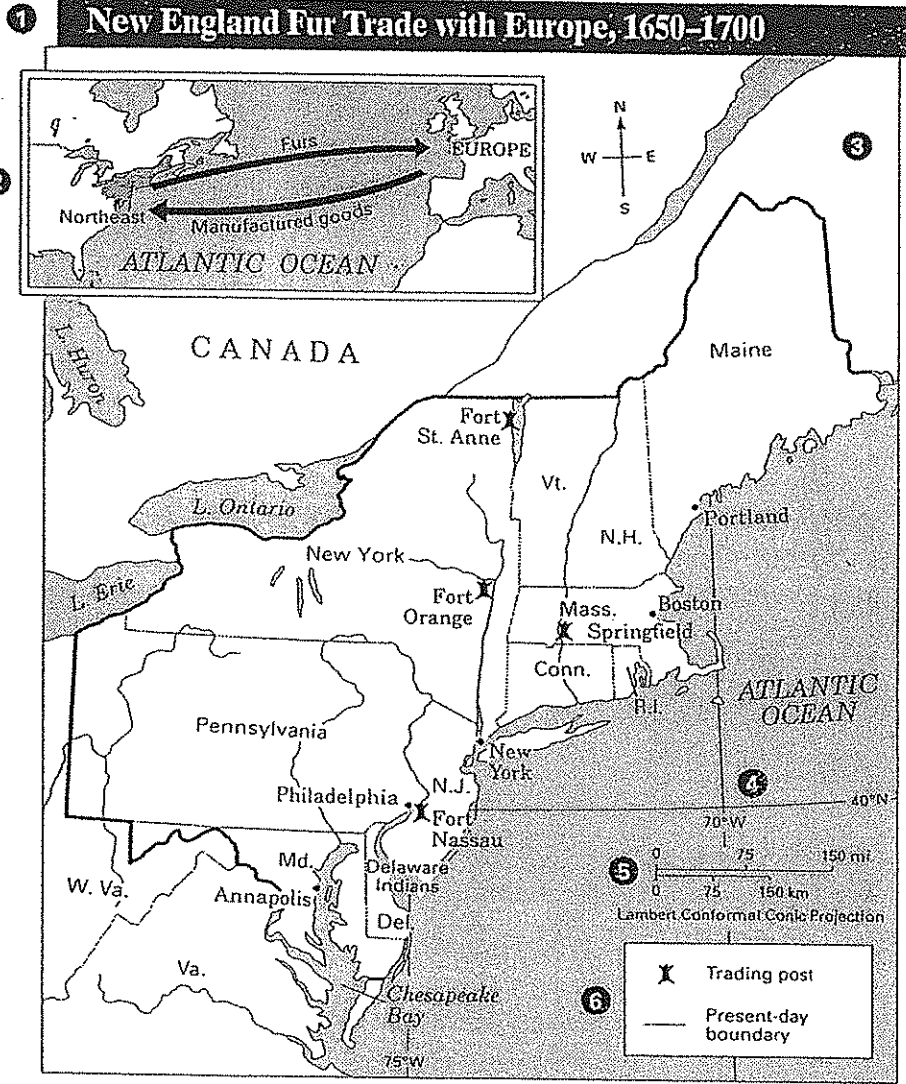


Understanding a Map



The different parts of a map are defined on pages G2 and G3 in the book. The following parts are numbered on this map:

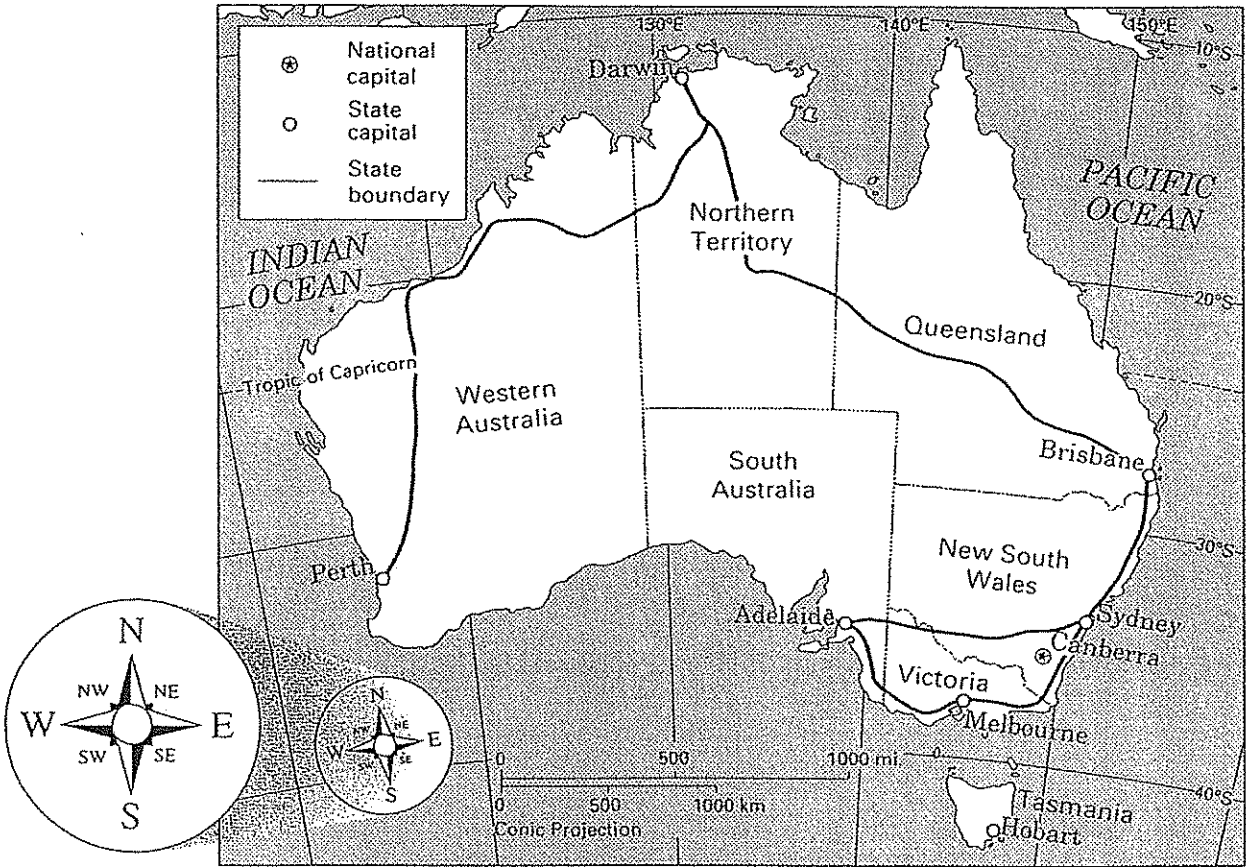
- grid
- inset map
- title
- key
- compass rose
- scale

Fill in each blank with the correct map part listed above. Then write the number that identifies the part on the map.

1. The _____ tells what the map is about.
2. The _____ is used to find directions.
3. The _____ is used to measure distances.
4. The _____ is used to locate a place.
5. The _____ tells what the symbols mean.
6. The _____ gives more information about the large map.

Number

Using a Compass Rose

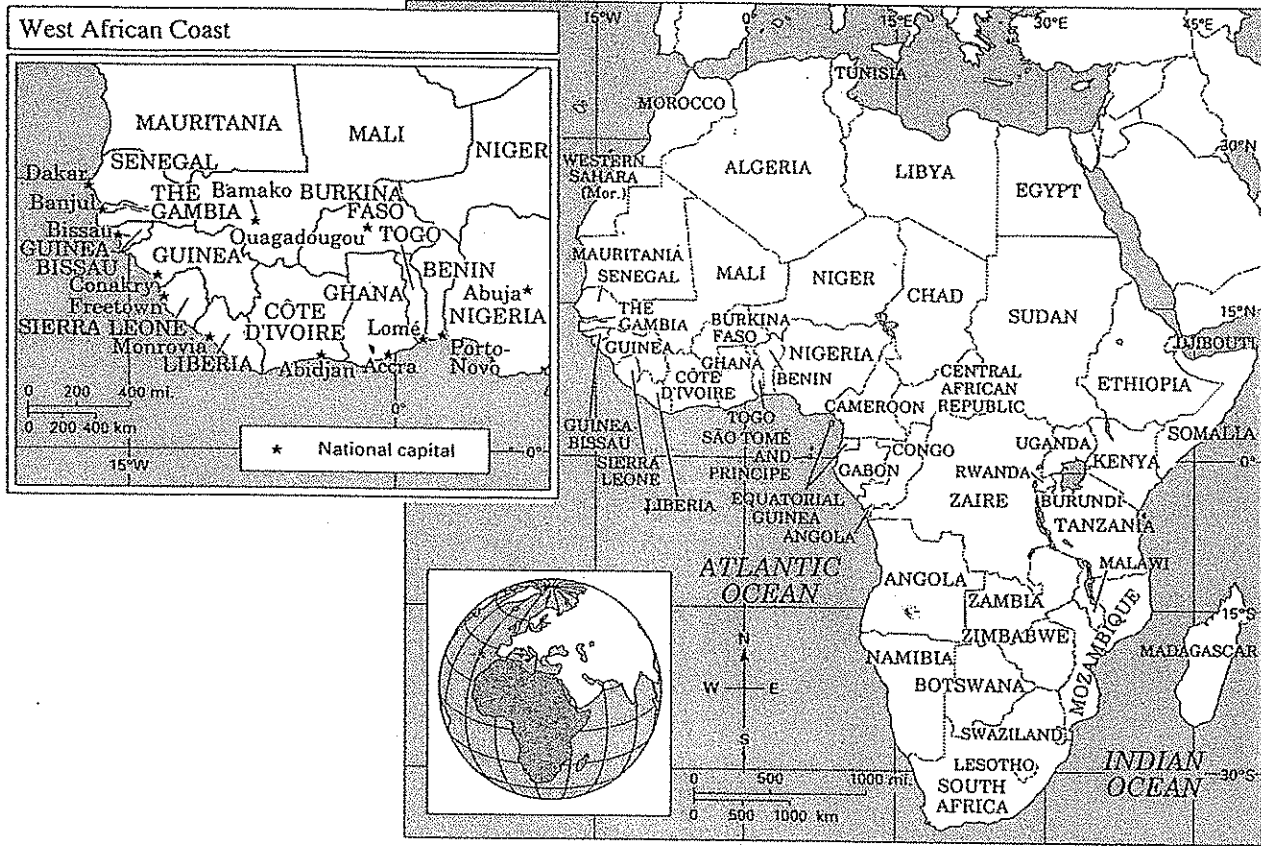


A compass rose helps you find cardinal and intermediate directions.

A travel route has been drawn on the map of Australia. Tell what direction you must go to visit each city on the route. Begin in Sydney.

- | | Direction |
|--|------------------|
| 1. Sydney to Adelaide | _____ |
| 2. Adelaide to Melbourne | _____ |
| 3. Melbourne to Brisbane | _____ |
| 4. Brisbane to Darwin | _____ |
| 5. Darwin to Perth | _____ |
| 6. If you fly from Perth back to Sydney,
in what direction will you travel? | _____ |

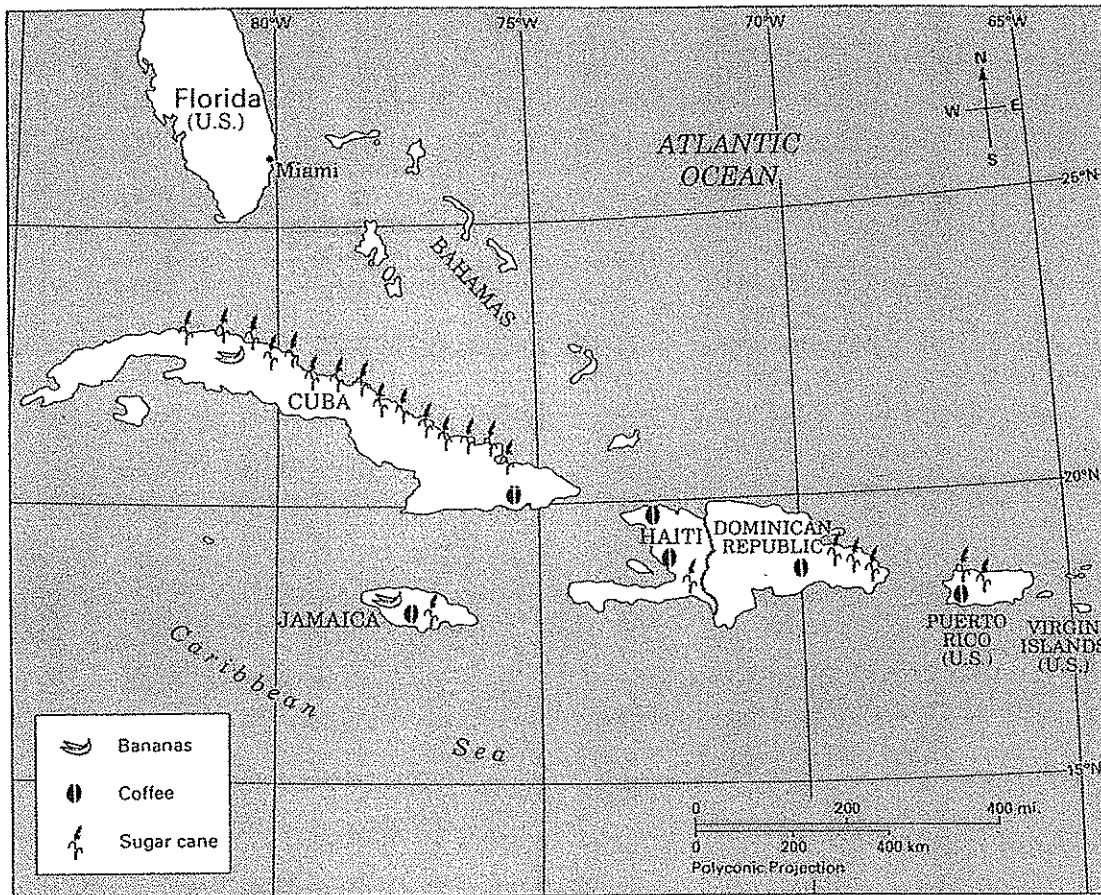
Selecting the Right Map



Three kinds of maps show different information about Africa. Circle the map that is the best one to give you the information below.

- | | | | |
|---|-----------|-----------|-------------|
| 1. The capital of Senegal is Dakar. | large map | inset map | locator map |
| 2. Africa is south of Europe. | large map | inset map | locator map |
| 3. There are over 45 countries in Africa. | large map | inset map | locator map |
| 4. Almost all of the capitals of West African countries are located on the coast. | large map | inset map | locator map |
| 5. The Atlantic Ocean is along Africa's west coast. | large map | inset map | locator map |

Reading a Product Map



This map shows the main crops grown in the Caribbean.

1. Some sugar is made from sugar cane. Imagine you are a sugar manufacturer. You want to build factories in countries that grow sugar cane.
 - a. Place an **X** in the Caribbean countries that grow sugar cane.
 - b. Write the names of those countries here. _____

2. Imagine you have a coffee factory. You buy beans from many different countries to make coffee.
 - a. Which Caribbean countries can supply you with coffee beans? _____

 - b. Color those countries red.